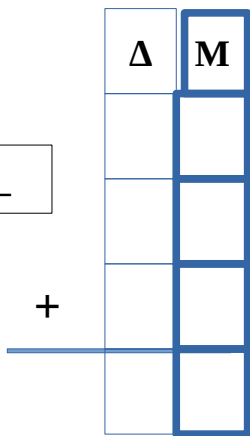
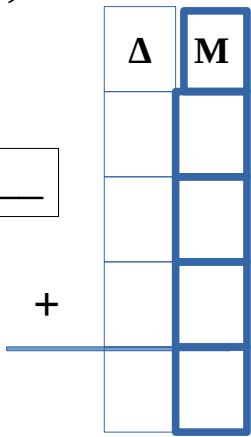


Κάνε τις προσθέσεις κάθετα. Θα σε βοηθήσουν οι πίνακες ώστε να στοιχίσεις τους αριθμούς.

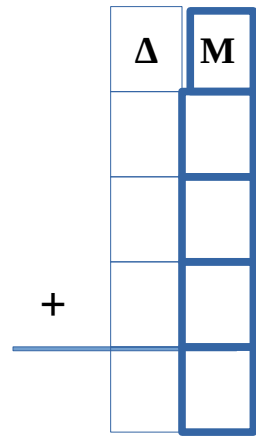
$$3+2+4= \underline{\quad}$$



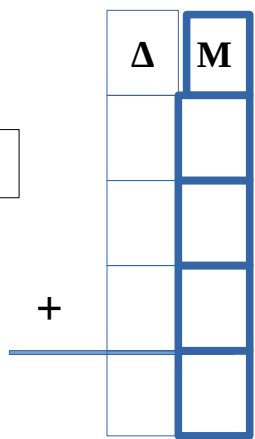
$$2+4+4= \underline{\quad}$$



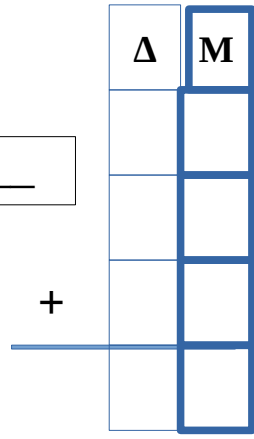
$$2+2+2= \underline{\quad}$$



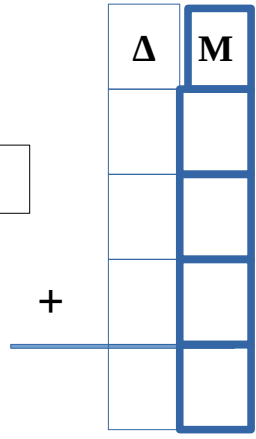
$$3+3+3= \underline{\quad}$$



$$3+3+2= \underline{\quad}$$



$$3+3+4= \underline{\quad}$$



Βρες ποιος είναι ο αριθμός των κύβων

Δ	Μ

Δ	Μ

Πόσα είναι όλα;

$10 + \underline{\quad} + \underline{\quad} + \underline{\quad} + \underline{\quad} + \underline{\quad} = \underline{\quad}$
--

$10 + \underline{\quad} + \underline{\quad} + \underline{\quad} + \underline{\quad} + \underline{\quad} = \underline{\quad}$
--