
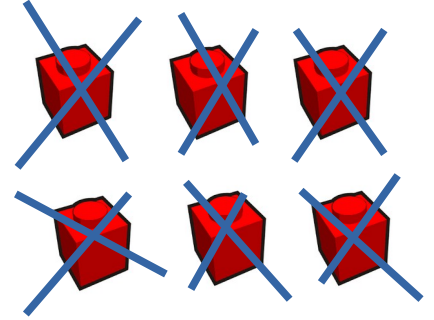




Παρατήρησε προσεκτικά την αφαίρεση στην πρώτη ομάδα με τουβλάκια.  
Κάνε κι εσύ τις ίδιες ενέργειες στις επόμενες αφαιρέσεις.

Δ	Μ
3	6


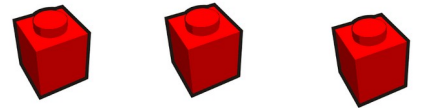




Δ	Μ

$$36 - 8 =$$

$$36 - 6 - 2 =$$

Δ	Μ
4	3




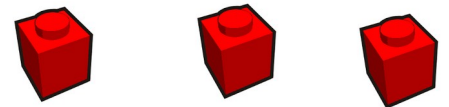

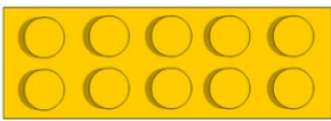


Δ	Μ

$$43 - 6 =$$

$$43 - \underline{\quad} - \underline{\quad} =$$

Δ	Μ



Δ	Μ

$$\underline{\quad} - 6 =$$

$$\underline{\quad} - \underline{\quad} - \underline{\quad} =$$

Όνομα: \_\_\_\_\_  
Επίθετο: \_\_\_\_\_

Ημερομηνία: \_\_\_\_\_