

Αντιστοίχισε τις προσθέσεις και τις αφαιρέσεις με τα αποτελέσματα που τους ταιριάζουν

- 7-2
- 7+1
- 9-2
- 6-1
- 10-2
- 6+1
- 5+3
- 4+4
- 3+3
- 8-2

7

5

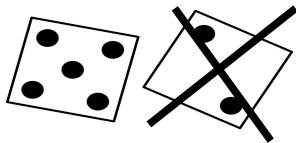
8

6

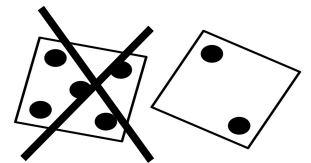
- 4+2
- 9-1
- 4+1
- 8-1
- 5+2
- 7-1
- 6+2
- 5+1
- 9-3
- 10-3

Γράψε τις πράξεις που ταιριάζουν σε κάθε εικόνα

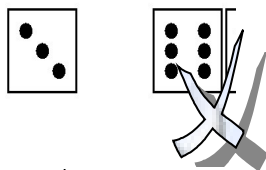
$7-2=$



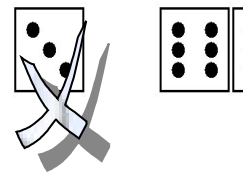
$7-5=$



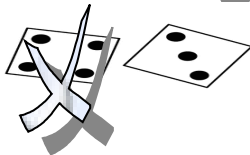
[Empty box for answer]




[Empty box for answer]




[Empty box for answer]




[Empty box for answer]




[Empty box for answer]




[Empty box for answer]



[Empty box for answer]



[Empty box for answer]



Όνομα: \_\_\_\_\_ Επίθετο: \_\_\_\_\_