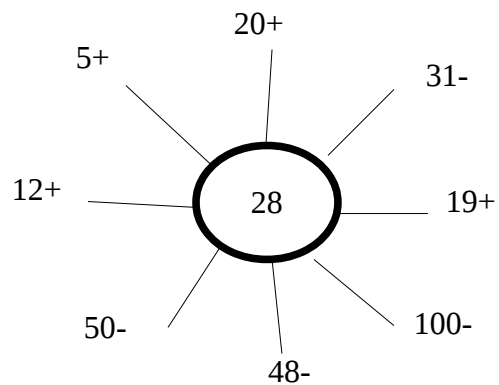
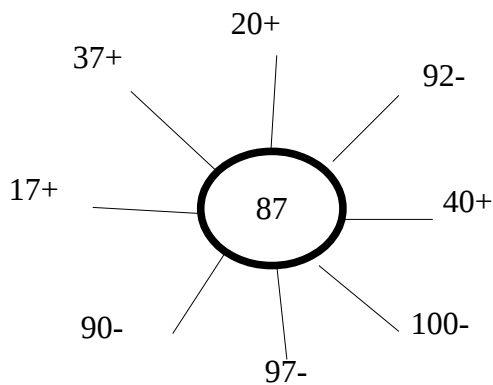
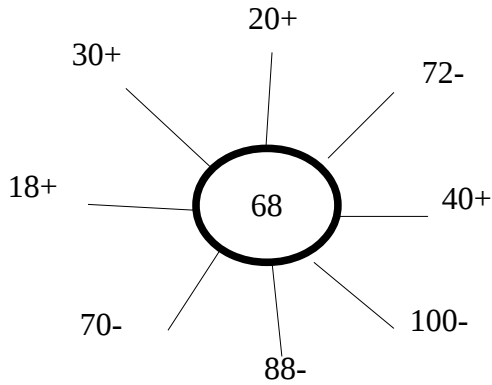
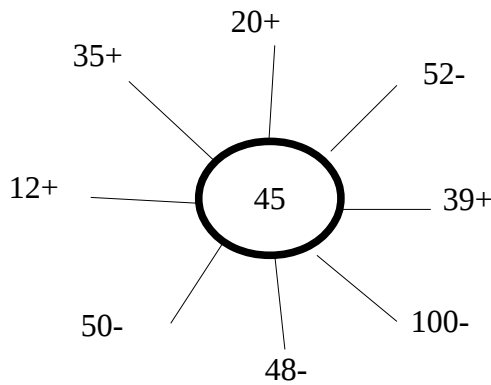


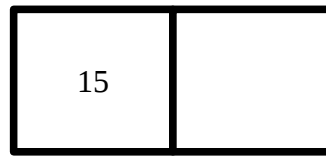
2ο επαναληπτικό κριτήριο
Τρίτη 22 Νοεμβρίου 2011 Όνομα:



Να βρεις το διπλάσιο κάθε σχήματος



$25+25=$



2 φορές το 15 =

Να βρεις το μισό κάθε σχήματος

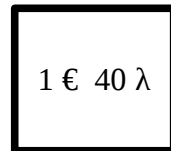
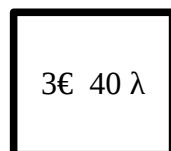
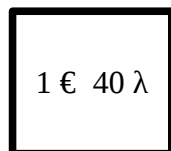
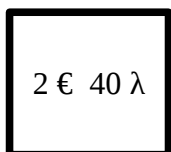


$60 = \underline{\quad} + \underline{\quad}$



$100 = \underline{\quad} + \underline{\quad}$

Πάω για ψώνια με 5 ευρώ. Τι ρέστα θα πάρω για το κάθε κουτί;



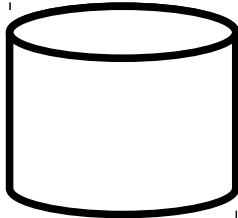

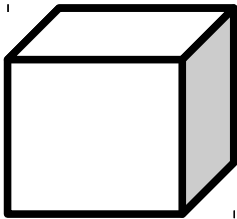

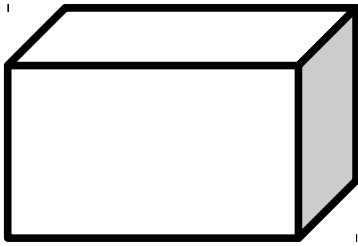
Ρέστα: _____

Ρέστα: _____


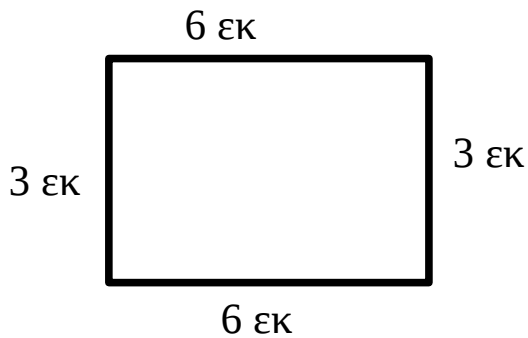
Ρέστα: _____

Ρέστα: _____

Αντιστοίχισε αυτά που ταιριάζουν



Μπορείς να βρεις την περίμετρο των παρακάτω σχημάτων;



Ποια λάθη μπορείς να εντοπίσεις στα παρακάτω παραλληλόγραμμα;

