

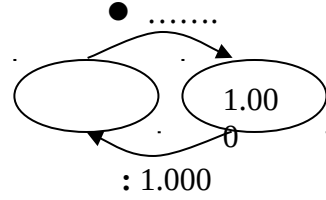
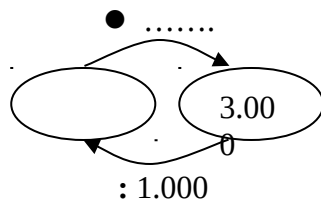
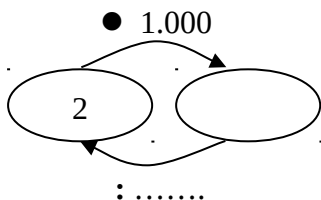
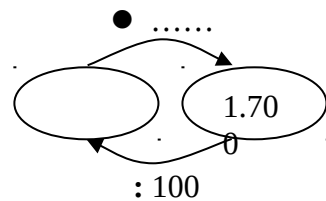
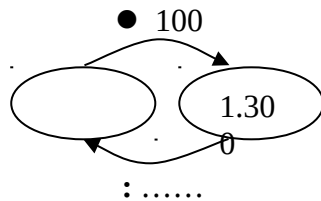
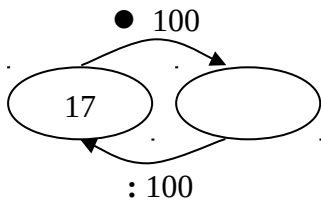
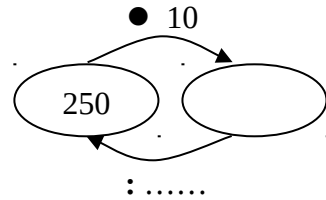
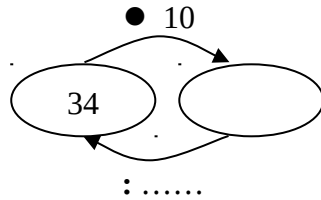
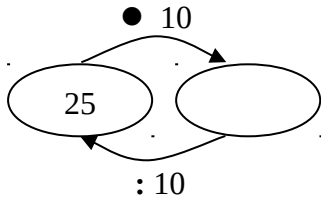
Τάξη Γ΄
 Όνομα _____
 Επώνυμο _____

ΜΑΘΗΜΑΤΙΚΑ

Πολλαπλασιασμός και διαίρεση με το 10, το 100



1. Πολλαπλασιάζω και διαιρώ με το 10, το 100 ή το 1.000.



2. Κάνω τους πολλαπλασιασμούς.

$7 \bullet 10 = \dots\dots\dots$

$28 \bullet 10 = \dots\dots\dots$

$253 \bullet 10 = \dots\dots\dots$

$5 \bullet 100 = \dots\dots\dots$

$23 \bullet 100 = \dots\dots\dots$

$105 \bullet 10 = \dots\dots\dots$

$3 \bullet 1.000 = \dots\dots\dots$

$75 \bullet 10 = \dots\dots\dots$

$193 \bullet 10 = \dots\dots\dots$

3. Κάνω τις διαιρέσεις.

$80 : 10 = \dots\dots\dots$

$2.700 : 100 = \dots\dots\dots$

$1.000 : 1.000 = \dots\dots\dots$

$150 : 10 = \dots\dots\dots$

$3.000 : 100 = \dots\dots\dots$

$2.000 : 1.000 = \dots\dots\dots$

$1.400 : 10 = \dots\dots\dots$

$1.900 : 100 = \dots\dots\dots$

$3.000 \bullet 1.000 = \dots\dots\dots$